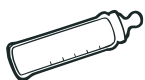



Customary Units of Capacity

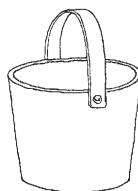
NOTE Students choose appropriate customary units and measures of capacity.

Tell what unit of capacity you would use to measure each object. Write *cup*, *pint*, *quart*, or *gallon*.

1

2

3

4

5

Circle which is more lemonade:

7 quarts or 2 gallons



1 cup (c)



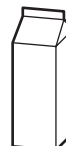
2 c =




1 pint (pt)



2 pt =



1 quart (qt)




4 qt =



1 gallon (gal)

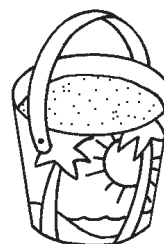
Circle the better capacity for each object.

6

10 quarts
or
100 quarts

7

2 cups
or
2 quarts

8

3 pints
or
3 gallons